





























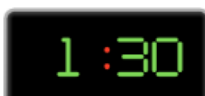



Year 2 Worksheet 8: Telling Time

Question 1: Which digital clock shows the same time as the analog clock? Circle the correct answer.



Question 2: Draw the hands of the clock according to the time given.



Question 3: Does this happen in the A.M. or P.M.?

- "A.M" refers to times before noon
- "P.M." to times after noon

1	Taking a shower before going to sleep at night.
2	Swimming lesson every Sunday morning.
3	Taking the school bus to school.
4	Attending a birthday party before sunset.
5	Going for a picnic after lunch.
6	Watching a movie before dinner.
7	Playing at the park after school.
8	Brushing teeth before leaving for school.



Question 4: Answer the following.

1	Tom went to the park at 2:30 PM and played for 1 hour. What time did he leave the park?
2	Lily's dance class started at 10:15 AM and lasted for 45 minutes. What time did her dance class end?
3	Emma started baking cookies at 4:45 PM and finished at 5:15 PM. How long did she spend baking?
4	The school bell rang at 12:30 PM for lunchtime. If lunch lasted for 40 minutes, when did the bell ring for the end of lunch?



5	John left for the party at 3:00 PM and arrived after 20 minutes. What time did he arrive at the party?
6	The movie started at 7:15 PM and ended at 8:30 PM. How long was the movie?
7	Sarah woke up at 6:45 AM. If she brushed her teeth for 2 minutes, what time did she finish brushing her teeth?
8	The music lesson began at 9:30 AM and lasted for 25 minutes. What time did the lesson end?



Personalised English & Math Tutoring



















Redeem Free Assessment

















Answer Key

Question 1:



Question 2: Draw the hands of the clock according to the time given.



Question 3: Does this happen in the a.m. or p.m.?

- "A.M" refers to times before noon
- "P.M." to times after noon

1	Taking a shower before going to sleep at night - p.m.
2	Swimming lesson every Sunday morning - a.m.
3	Taking the school bus to school - a.m.
4	Attending a birthday party before sunset - p.m.
5	Going for a picnic after lunch - p.m.
6	Watching a movie before dinner - p.m.
7	Playing at the park after school - p.m.
8	Brushing teeth before leaving for school - a.m.



Question 4: Answer the following.

1	Tom went to the park at 2:30 PM and played for 1 hour. What time did he leave the park? Answer: 3:30 PM
2	Lily's dance class started at 10:15 AM and lasted for 45 minutes. What time did her dance class end? Answer: 11:00 AM
3	Emma started baking cookies at 4:45 PM and finished at 5:15 PM. How long did she spend baking? Answer: 30 minutes
4	The school bell rang at 12:30 PM for lunchtime. If lunch lasted for 40 minutes, when did the bell ring for the end of lunch? Answer: 1:10 PM
5	John left for the party at 3:00 PM and arrived after 20 minutes. What time did he arrive at the party? Answer: 3:20 PM
6	The movie started at 7:15 PM and ended at 8:30 PM. How long was the movie? Answer: 1 hour and 15 minutes
7	Sarah woke up at 6:45 AM. If she brushed her teeth for 2 minutes, what time did she finish brushing her teeth? Answer: 6:47 AM
8	The music lesson began at 9:30 AM and lasted for 25 minutes. What time did the lesson end? Answer: 9:55 AM