











## Worksheet 5: Adding Numbers

Question 1: Count and fill in the correct answer.


	+		=	<input type="text"/>
<input type="text"/>		<input type="text"/>		
	+		=	<input type="text"/>
<input type="text"/>		<input type="text"/>		
	+		=	<input type="text"/>
<input type="text"/>		<input type="text"/>		



+




=



+



=



+


















=





Question 2: Add the number on the dice.

	+		=	
	+		=	
	+		=	
	+		=	
	+		=	



+



=



+



=



+



=




+



=



+



=



+



=





# Personalised English & Math Tutoring







Redeem Free Assessment






# Answer Key

Question 1:

	+		=	<input type="text" value="5"/>
<input type="text" value="4"/>		<input type="text" value="1"/>		
	+		=	<input type="text" value="7"/>
<input type="text" value="5"/>		<input type="text" value="2"/>		
	+		=	<input type="text" value="10"/>
<input type="text" value="6"/>		<input type="text" value="4"/>		



6

4



3

1


















4

4



Question 2:

	+		=	
	+		=	
	+		=	
	+		=	
	+		=	





$$\begin{array}{|c|} \hline \begin{array}{c} \square \\ \hline \bullet \quad \bullet \quad \bullet \\ \hline \end{array} + \begin{array}{c} \square \\ \hline \bullet \quad \bullet \\ \bullet \quad \bullet \\ \hline \end{array} = \begin{array}{c} \square \\ \hline 7 \\ \hline \end{array} \\ \hline \end{array}$$

$$\begin{array}{|c|} \hline \begin{array}{c} \square \\ \hline \bullet \quad \bullet \quad \bullet \\ \hline \end{array} + \begin{array}{c} \square \\ \hline \bullet \quad \bullet \quad \bullet \\ \bullet \quad \bullet \quad \bullet \\ \hline \end{array} = \begin{array}{c} \square \\ \hline 9 \\ \hline \end{array} \\ \hline \end{array}$$

$$\begin{array}{|c|} \hline \begin{array}{c} \square \\ \hline \bullet \quad \bullet \\ \bullet \quad \bullet \\ \hline \end{array} + \begin{array}{c} \square \\ \hline \bullet \quad \bullet \\ \bullet \quad \bullet \\ \hline \end{array} = \begin{array}{c} \square \\ \hline 8 \\ \hline \end{array} \\ \hline \end{array}$$

$$\begin{array}{|c|} \hline \begin{array}{c} \square \\ \hline \bullet \quad \bullet \\ \bullet \quad \bullet \quad \bullet \\ \hline \end{array} + \begin{array}{c} \square \\ \hline \bullet \quad \bullet \\ \bullet \quad \bullet \\ \hline \end{array} = \begin{array}{c} \square \\ \hline 9 \\ \hline \end{array} \\ \hline \end{array}$$

$$\begin{array}{|c|} \hline \begin{array}{c} \square \\ \hline \bullet \quad \bullet \\ \bullet \quad \bullet \quad \bullet \\ \hline \end{array} + \begin{array}{c} \square \\ \hline \bullet \quad \bullet \\ \hline \end{array} = \begin{array}{c} \square \\ \hline 7 \\ \hline \end{array} \\ \hline \end{array}$$

$$\begin{array}{|c|} \hline \begin{array}{c} \square \\ \hline \bullet \quad \bullet \quad \bullet \\ \bullet \quad \bullet \quad \bullet \\ \hline \end{array} + \begin{array}{c} \square \\ \hline \bullet \quad \bullet \quad \bullet \\ \bullet \quad \bullet \quad \bullet \\ \hline \end{array} = \begin{array}{c} \square \\ \hline 12 \\ \hline \end{array} \\ \hline \end{array}$$